

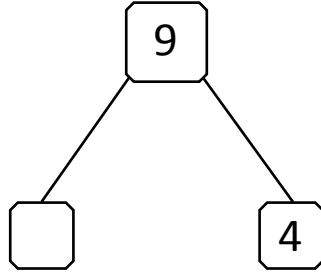


NAME _____ DATE _____

SUBTRACTION WORD PROBLEMS

Use the number bond to complete the number sentences. Use simple math drawings to tell math stories.

1)



$$\boxed{} + \boxed{4} = \boxed{9}$$

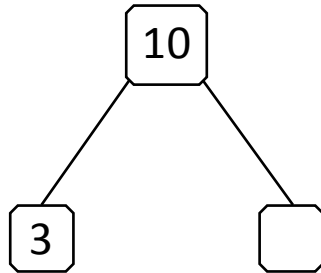
$$\boxed{9} - \boxed{4} = \boxed{}$$

In a class number of boys and girls are ____ totally.

Number of girls ____.

Number of boys ____.

2)



$$\boxed{3} + \boxed{} = \boxed{10}$$

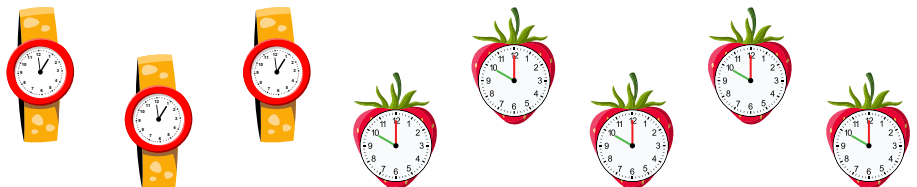
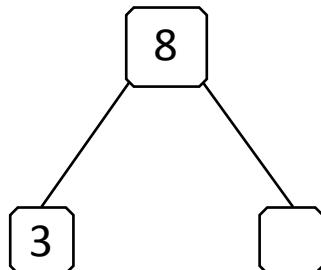
$$\boxed{10} - \boxed{} = \boxed{3}$$

There are ____ animals in a jungle.

Number of dogs ____ in the jungle.

Number of foxes ____ in the jungle.

3)



$$\boxed{3} + \boxed{} = \boxed{8}$$

$$\boxed{8} - \boxed{} = \boxed{3}$$

Total watches ____ in the shop.

Hand watches ____.

Number of wall clocks ____.